

Støddfrøði

45 minuttir



| | | |
|---------|-----------|-------|
| Navn : | Flokkur : | Nr. : |
| Skúli : | Lærari : | |

Svarini verða skrivað á uppgávuarkið. Um tað er ein uppgáva, sum tú ikki dugir, far so víðari. Tú kanst skriva við blýanti.


1.

a) $12 + 7 =$ _____ b) $17 + 16 =$ _____

c) $19 - 13 =$ _____ d) $53 - 15 =$ _____

Kladda

2.

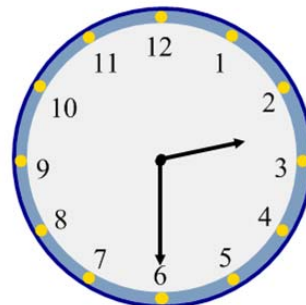


Hvussu nógv kosta fruktirnar tilsamans ?

_____ kr

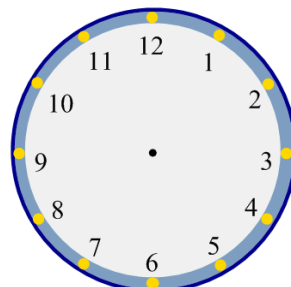
3.

a) Hvussu nógv er klokkan? _____



Anna skal spæla tvørfloytu hálvum sjei.

b) Tekna stóra og lítla pinn.



4. Set ring um størsta talið :

153

307

99

296

144

5. Set rétta talið í

Kladda

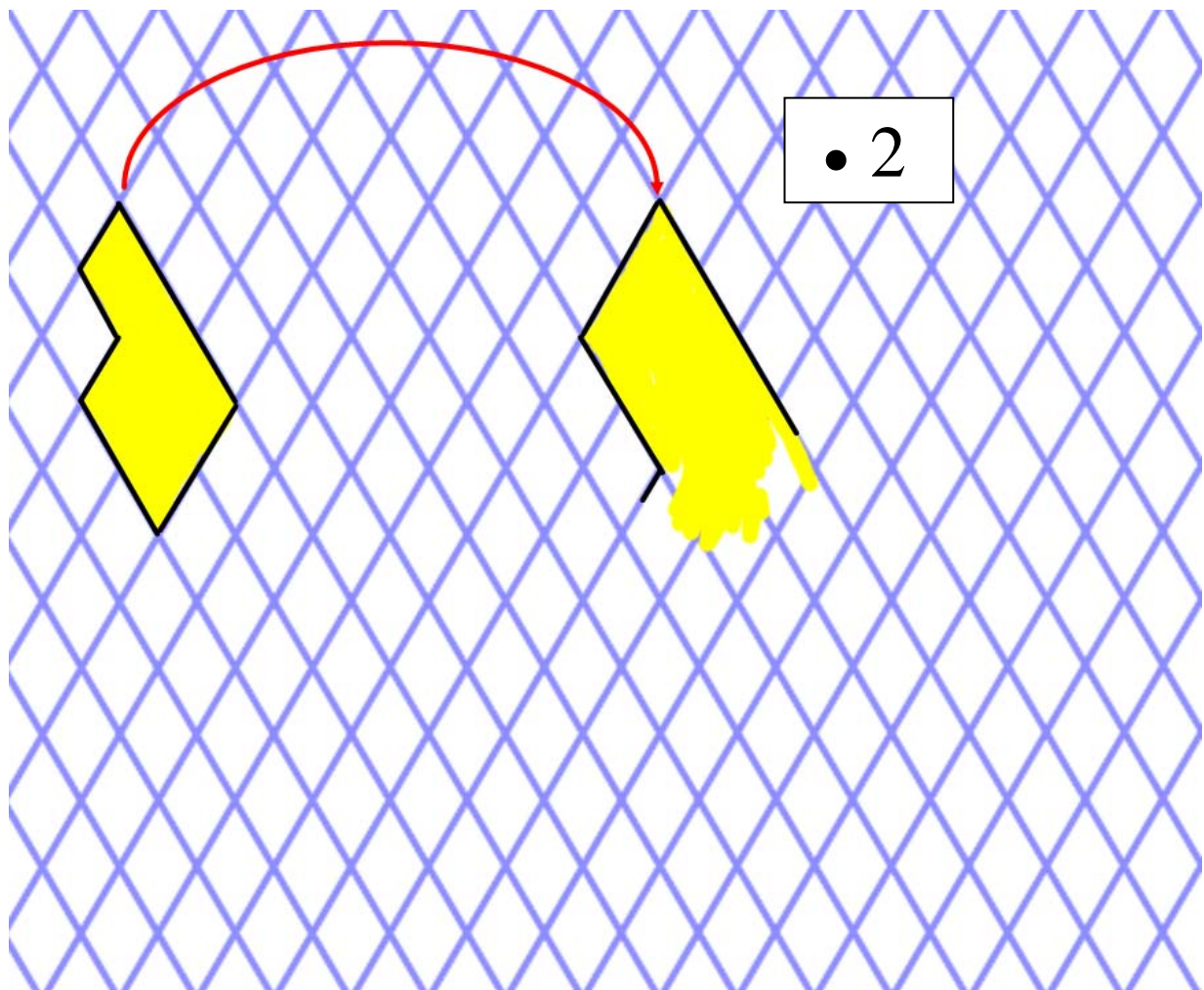
a) + 6 = 14

b) 15 - = 8

c) 35 : = 5

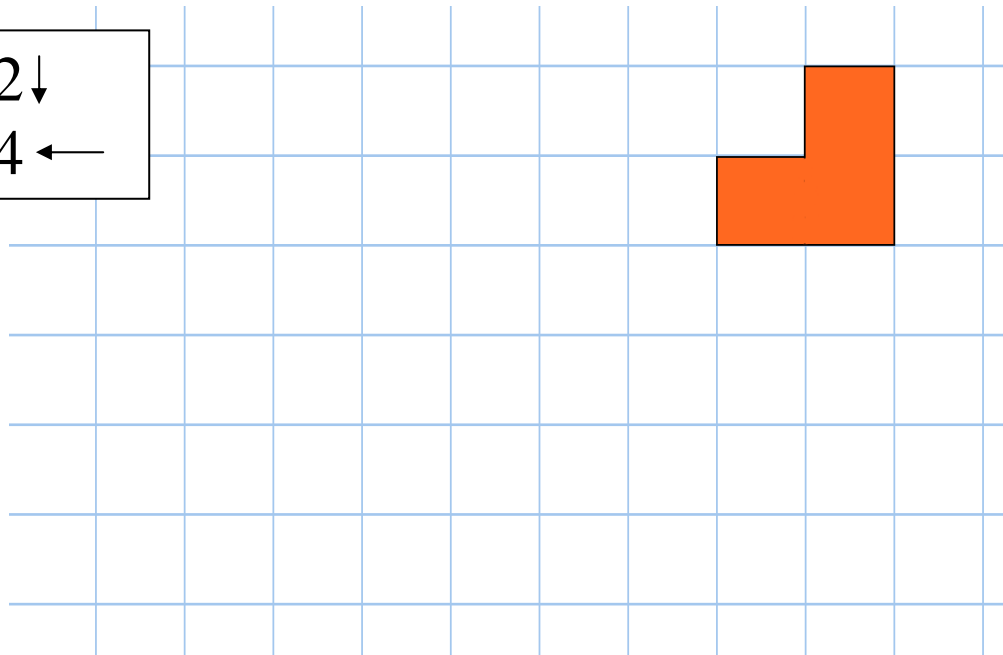
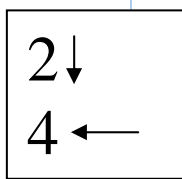
d) · = 18

6. Tekna skapið tvær ferðir so stórt.

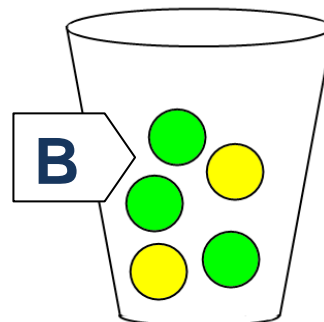
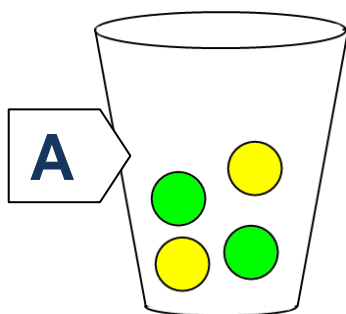


7.

Flyt skapið fýra til vinstru og tvey niður.



8.



Úr hvørji spann er kjansurin størri at taka eina grøna kúlu? _____

9.

a) $13 \cdot 7 =$ _____

b) $6 \cdot 13 =$ _____

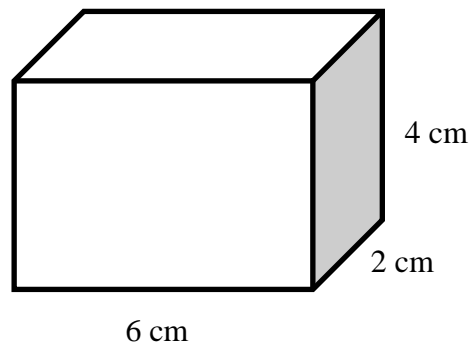
c) $25 \cdot 15 =$ _____

Kladda

10.

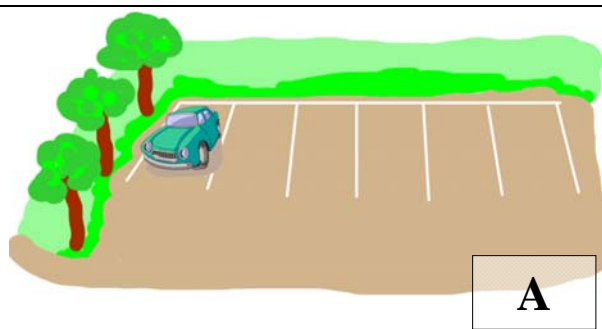
Rúmdin á kassanum er:

_____ cm³

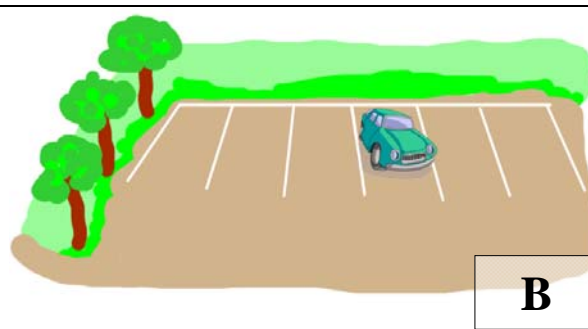


11.

Hvar eru stórri kjansur at parkera við síðuna av einum grønum bili.
A ella B ?



A



B

12.

| 202 Oyrabakki - Tjørnuvík | | | | |
|---------------------------|-----------|-------------|--------------|-------------|
| Dag | Tjørnuvík | Á Oyrabakki | Av Oyrabakka | Í Tjørnuvík |
| x | 07:10 | 07:35 | 07:35 | 08:00 |
| x | 08:00 | 08:25 | | |
| x | | | 15:05 | 15:30 |
| x | 15:30 | 15:55 | 16:05 | 16:30 |
| x | 16:40 | 17:05 | 17:05 | 17:30 |
| x | 17:30 | 17:55 | | |

x = gerandisdagar (mánadag-friggjadag) / all days from Mon. to Fri.

a) Nær fer bussurin seinasta túrin úr Tjørnuvík? _____

b) Hvussu leingi er at koyra úr Tjørnuvík til Oyrabakka? _____

c) Hvussu ofta koyrir bussurin úr Tjørnuvík um dagin? _____

13.

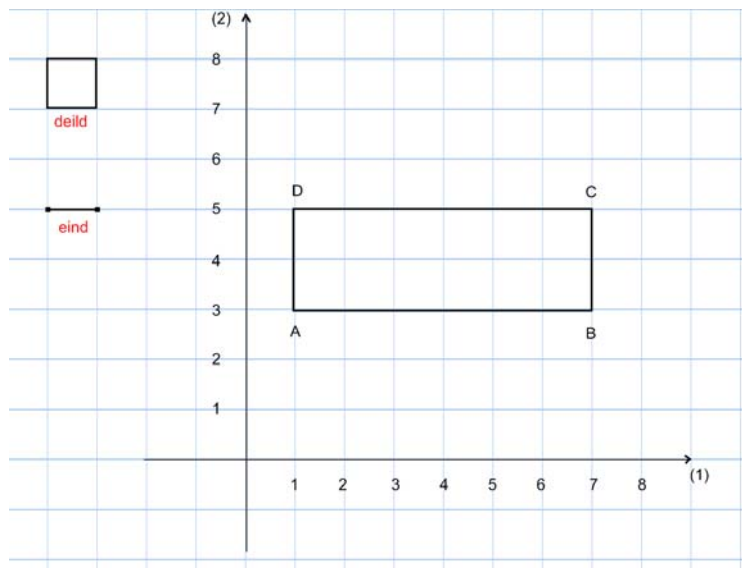
a) Skriva krosstölina hjá
punktinum C = (,)

b) Ummálið er:

_____ eindir

c) Viddin á ABCD er:

_____ deildir

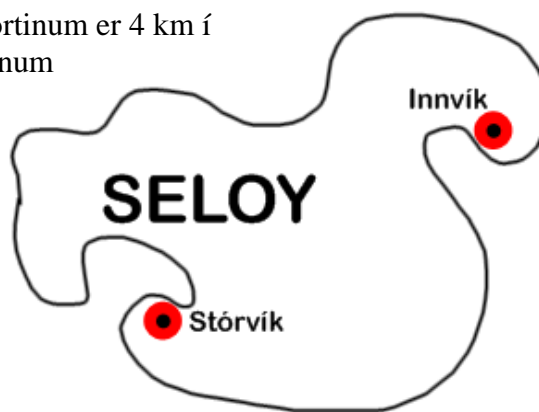


14.

1 cm á kortinum er 4 km í
veruleikanum

Hvussu langt er úr
Stórvík
til
Innvíkar:

_____ km



15.

a) Hvussu nógv vísir
hitamátarin A

_____ °

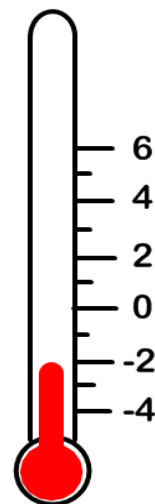
b) Hvussu nógv vísir
A meira enn B ?

_____ °

A

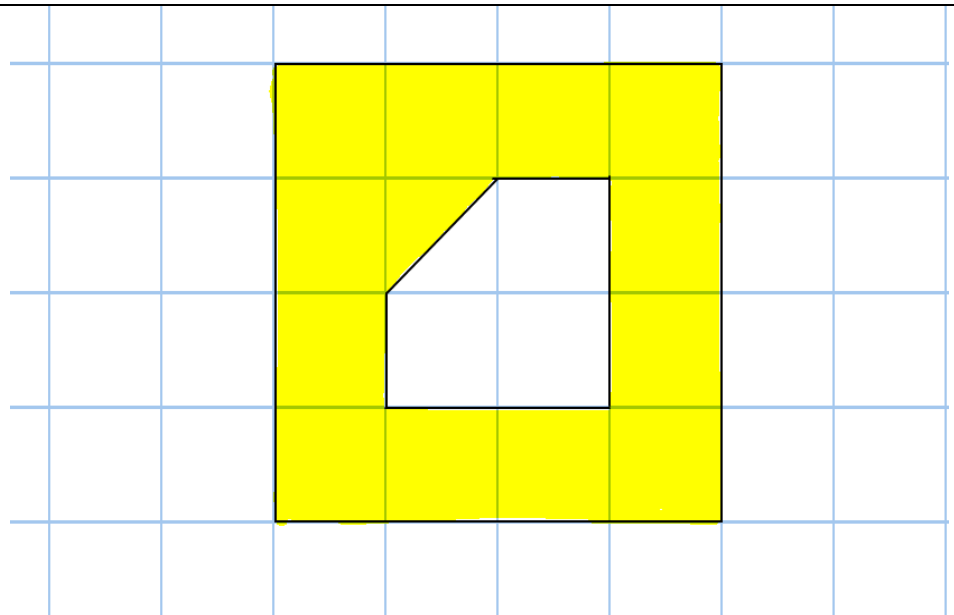


B



16.

Víddin á gula skapinum er:




17.

| | | | |
|-------|-------------------------------------|---------------|--|
| Dømi: | Lita | $\frac{1}{3}$ | |
| a) | Lita | $\frac{1}{4}$ | |
| b) | Lita | $\frac{3}{5}$ | |
| c) | Skriva brotið, sum passar til _____ | | |

18.

Hvussu nógv kosta allar bøkurnar tilsamans ? _____ kr

10 kr/stk



7 kr/stk

19. Rokna :

Kladda

a) $437 + 46 =$ _____

b) $75 - 37 =$ _____

c) $4758 + 495 =$ _____

20. Loys líkningarnar :

a) $2 \cdot x + 5 = 13$

b) $\frac{1}{2} \cdot x - 2 = 0$

c) $x \cdot x = 49$

$x =$ _____

$x =$ _____

$x =$ _____