



Navn :	Flokkur :	Nr. :
Skúli :	Lærari :	

Svarini verða skrivað á uppgávuarkið. Um það er ein uppgáva, sum tú ikki dugir, far so víðari. Tú kanst skriva við blýanti.

1.

a)  $4 + 3 =$  \_\_\_\_\_ b)  $12 + 17 =$  \_\_\_\_\_

c)  $8 - 3 =$  \_\_\_\_\_ d)  $37 - 14 =$  \_\_\_\_\_

**Kladda**

2.

4 kr.



10 kr.



12 kr.

3 kr.



Hvussu nógv kosta allar vørurnar ?

\_\_\_\_\_

3.

a) Tá Høgni fór í skúla, var klokkan \_\_\_\_\_



b) Hann fór heim klokkan \_\_\_\_\_



c) Hvussu leingi var Høgni í skúla ? \_\_\_\_\_

4. Set ring um största talið :

340

39

380

198

240

5. Set rétta talið í

a) **6** +  = **13**

b) **13** -  = **7**

c)   : **4** = **6**

d)  •  = **18**

*Kladda*

6.

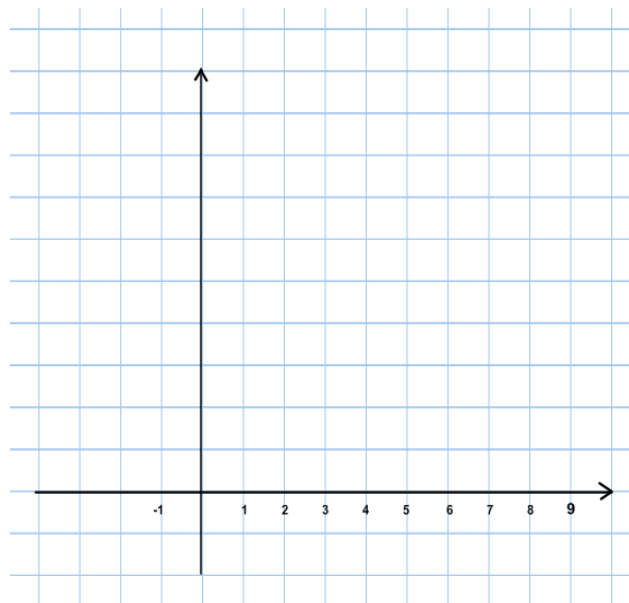
Tekna linjuna :

(5,9) → (7,7) → (6,7) → (8,5) →

(7,5) → (8,3) → (6,3) → (6,1) →

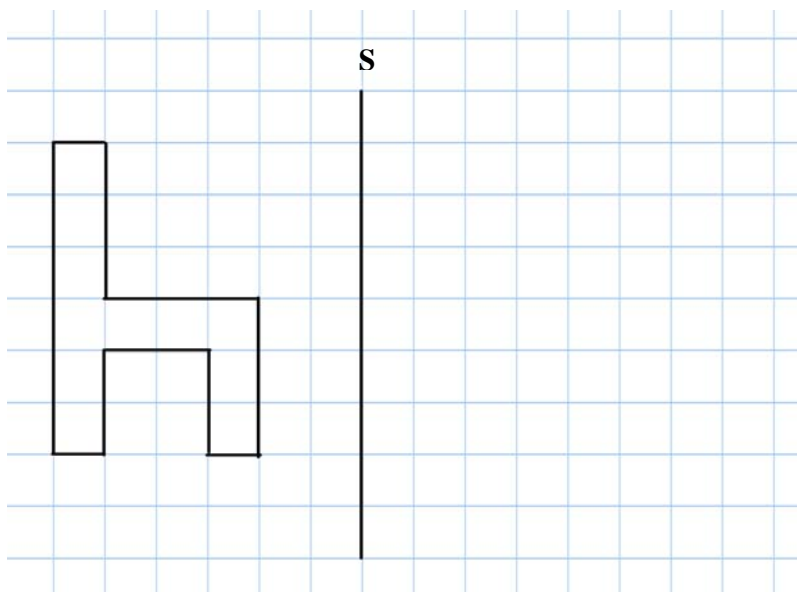
(4,1) → (4,3) → (2,3) → (3,5) →

(2,5) → (4,7) → (3,7) → (5,9) .



**7.**

Spiegla um S



8.

10	Februar		Mars
1	S	1	S
2	M	2	M
3	T	3	T
4	M	4	M
5	H	5	H
6	F	6	F
7	L	7	L
8	S	8	S
9	M	9	M
10	T	10	T
11	M	11	M
12	H	12	H
13	F	13	F
14	L	14	L
15	S	15	S
16	M	16	M
17	T	17	T
18	M	18	M
19	H	19	H
20	F	20	F
21	L	21	L
22	S	22	S
23	M	23	M
24	T	24	T
25	M	25	M
26	H	26	H
27	F	27	F
28	L	28	L
		29	S
		30	M
		31	T

a) Set **X** í 17. mars (í kalendaranum)

b) 1. mars legði Sanna 2 krónur í sparikistilin.

Síðani hefur hon hvønn dag lagt 2 krónur í kistilin.

Hvussu nógv hevur hon lagt í kistilin til samans 17. mars ?

---

9. Rokna :

*Kladda*

a)  $6 \cdot 7 =$  \_\_\_\_\_

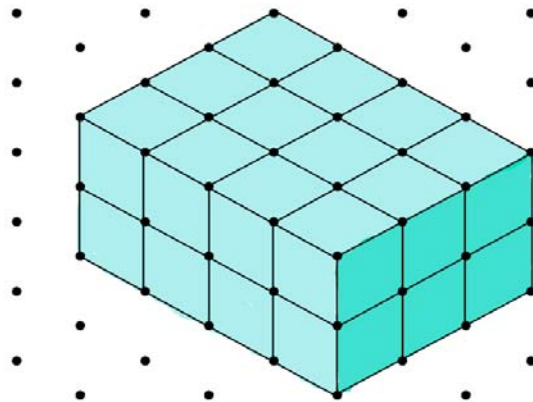
b)  $3 \cdot 13 =$  \_\_\_\_\_

c)  $12 \cdot 4 =$  \_\_\_\_\_

10.

Rúmdin á skapinum er :

\_\_\_\_\_



11. Máta :



a) Longd = \_\_\_\_\_ cm



b) Tvørmát = \_\_\_\_\_ mm

**12.** Skriva **S** um útsögnin er sonn, og skriva **Ó** um útsögnin er ósonn :

a)  $6 \cdot 4 = 3 \cdot 8$

☐

**Kladda**

b)  $7 + 5 > 6 + 6$

☐

c)  $6\frac{1}{2} > 6$

☐

**13.**

a) Tekna fýrkant ABCD

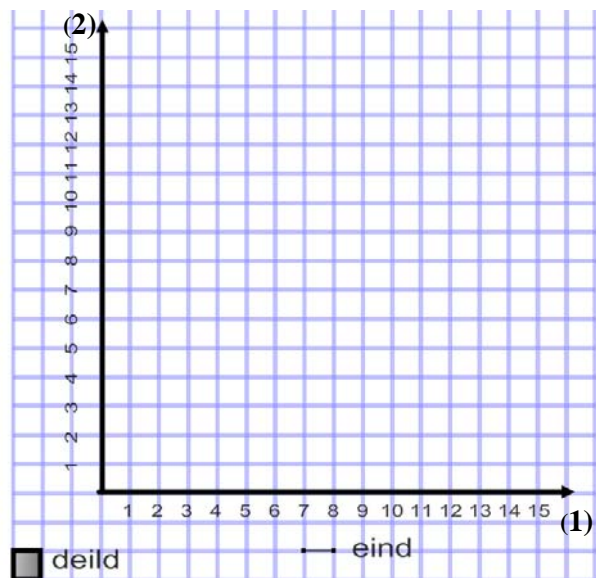
$A = (4, 5)$        $B = (4, 10)$

$C = (11, 10)$      $D = (11, 5)$

b) Ummálið er : \_\_\_\_\_ eindir

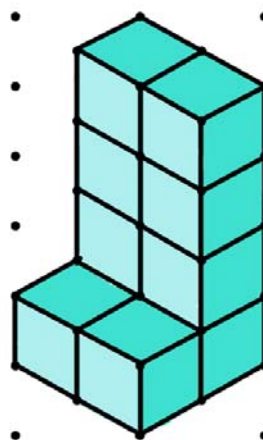
c) Viddin á ABCD

er : \_\_\_\_\_ deildir



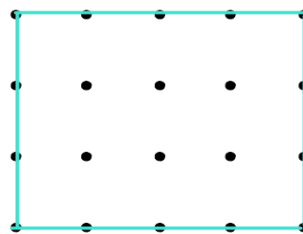
**14.**

Rúmdin á skapinum er : \_\_\_\_\_



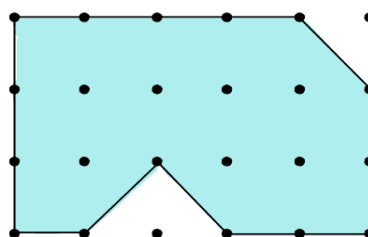
15.

Ummálið er : \_\_\_\_\_



16.

Viddin er : \_\_\_\_\_



17.

Brot

Lita brotið

Dømi

$$\frac{1}{3}$$

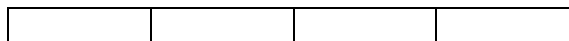
=



a)

$$\frac{1}{4}$$

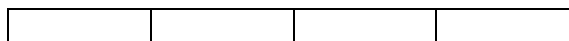
=



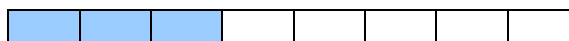
b)

$$\frac{1}{2}$$

=



c) Skriva brotið sum passar til



\_\_\_\_\_

18.



6 kr/stk



20 kr/stk

Hvussu nógv kosta allar vørurnar ?

**Kladda**

19. Rokna :

a)  $216 + 86 =$  \_\_\_\_\_

b)  $44 - 18 =$  \_\_\_\_\_

c)  $8628 + 595 =$  \_\_\_\_\_

**Kladda**

20. Loys líkningarnar :

a)  $2 \cdot x + 3 = 11$

$x =$  \_\_\_\_\_

b)  $\frac{x}{2} - 3 = 0$

$x =$  \_\_\_\_\_

c)  $x \cdot x \cdot x = 8$

$x =$  \_\_\_\_\_