


# Støddfrøði

45 minuttir



Navn :	Flokkur :	Nr. :
Skúli :	Lærari :	

Svarini verða skrivað á uppgávuarkið. Um tað er ein uppgáva, sum tú ikki dugir, far so víðari. Tú kanst skriva við blýanti.

1.

a)  $13 + 6 =$  \_\_\_\_\_ b)  $18 + 15 =$  \_\_\_\_\_


c)  $19 - 14 =$  \_\_\_\_\_ d)  $43 - 14 =$  \_\_\_\_\_

**Kladda**

2.



**14 kr**



**7 kr**



**8 kr**



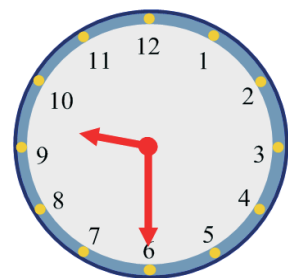
**3 kr**

Hvussu nógv kostar grønmestið  
tílsamans ?

\_\_\_\_\_ kr

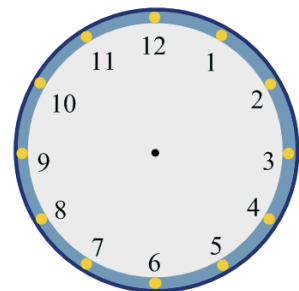
3.

a) Hvussu nógv er klokkan? \_\_\_\_\_



Heri skal spæla fót bólt hálvgum fýra.

b) Tekna stóra og lítla pinn.



4. Set ring um minsta talið :

153	207	199	296	144
-----	-----	-----	-----	-----

5. Set rætta talið í

a)  + 8 = 15

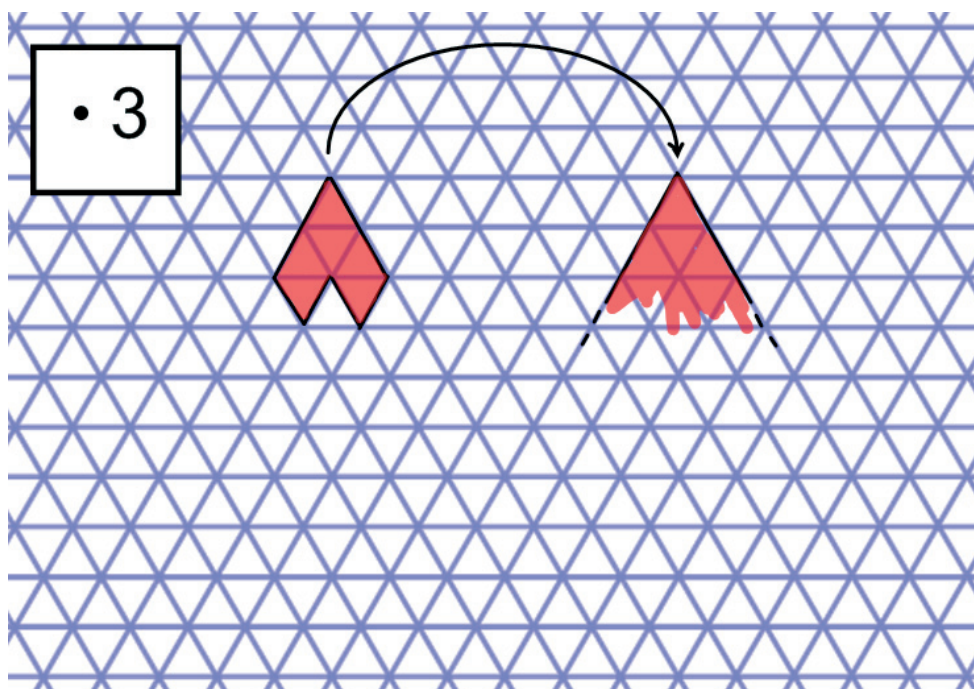
b) 13 -  = 7

c)  : 7 = 5

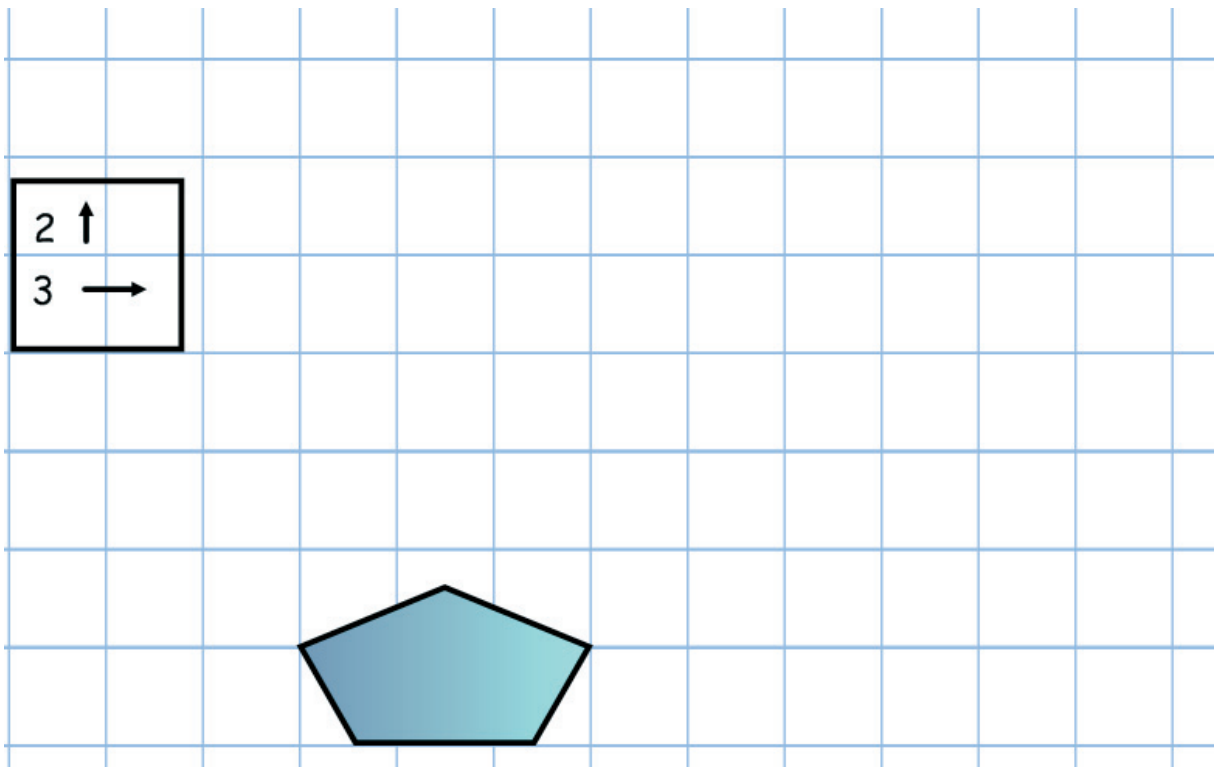
d)  ·  = 24

*Kladda*

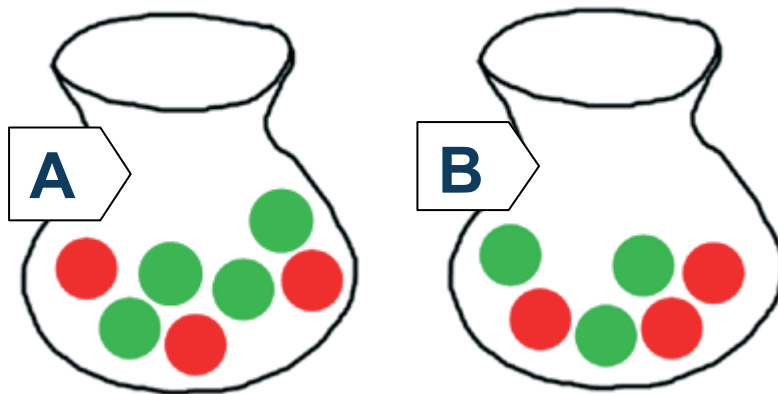
6. Tekna skapið tríggar ferðir so stórt.



7. Flyt skapið trý til hægri og tvey upp.



8.



Úr hvørji krukku er kjansurin størri at taka eina reyða kúlu? \_\_\_\_\_

**9. Rokna :**

**Kladda**

a)  $14 \cdot 6 =$  \_\_\_\_\_

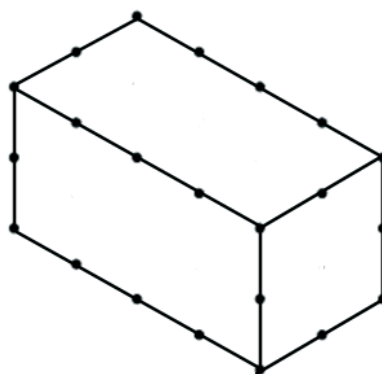
b)  $8 \cdot 12 =$  \_\_\_\_\_

c)  $25 \cdot 13 =$  \_\_\_\_\_

**10.**

Rúmdin á skapinum er:

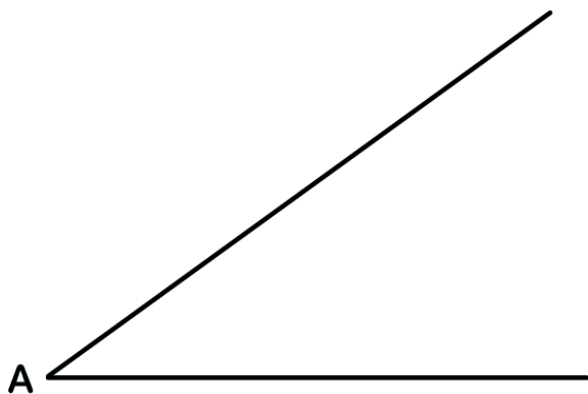
\_\_\_\_\_



**11. Máta :**



a) Longd = \_\_\_\_\_ cm



b) Vinkul A = \_\_\_\_\_ °

12. Skriva S, um útsögnin er sonn, og skriva Ó, um útsögnin er ósonn :

a)  $6 \cdot 7 = 3 \cdot 14$

☐

**Kladda**

b)  $7 + 5 > 6 + 6$

☐

c)  $5\frac{1}{2} > 5$

☐

13.

a) Skriva krosstølini hjá punktinum C = ( , )

☐

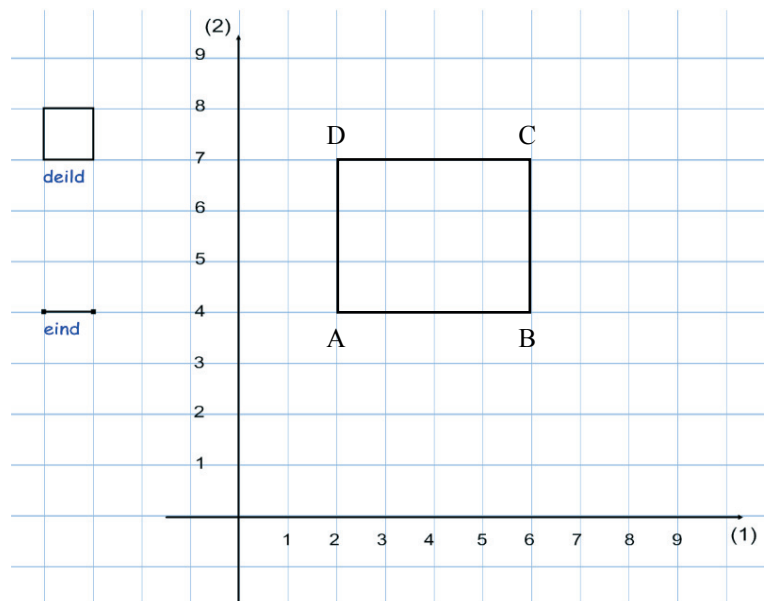
deild

b) Ummálið er:

\_\_\_\_\_ eindir

c) Viddin á ABCD er:

\_\_\_\_\_ deildir



14.

Hvussu langt er úr  
Pollavík  
til  
Slættavíkar:

\_\_\_\_\_ km



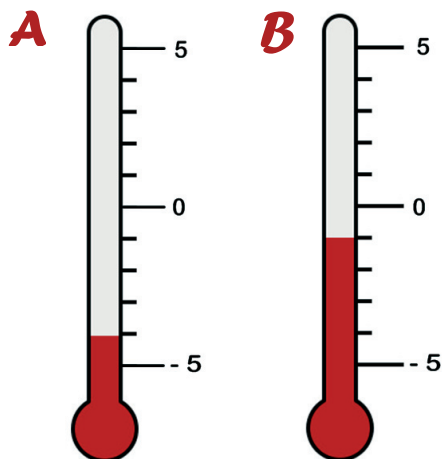
15.

- a) Hvussu nógv vísir hitamátarin A

\_\_\_\_\_ °

- b) Hvussu nógv vísir B meira enn A?

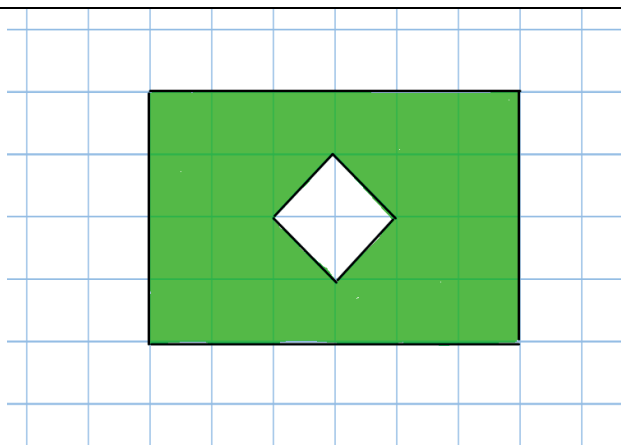
\_\_\_\_\_ °



16.

Víddin á litaða skapinum er:

\_\_\_\_\_



17.

Brot

Lita brotið

Dømi

$\frac{1}{3}$

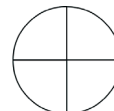
=



a)

$\frac{1}{4}$

=



b)

$\frac{3}{5}$

=



c) Skriva brotið, sum passar til

\_\_\_\_\_



18.

10 kr/stk



7 kr/stk

Hvussu nógv kosta allar vørurnar tilsamans ?

\_\_\_\_\_ kr

**Kladda**

19. Rokna :

a)  $427 + 56 =$  \_\_\_\_\_

b)  $65 - 27 =$  \_\_\_\_\_

c)  $6558 + 695 =$  \_\_\_\_\_

**Kladda**

20. Loys líkningarnar :

a)  $2 \cdot x + 3 = 11$

b)  $\frac{x}{4} - 2 = 0$

c)  $x \cdot x \cdot x = 8$

$x =$  \_\_\_\_\_

$x =$  \_\_\_\_\_

$x =$  \_\_\_\_\_



Prent: Føroyaprent